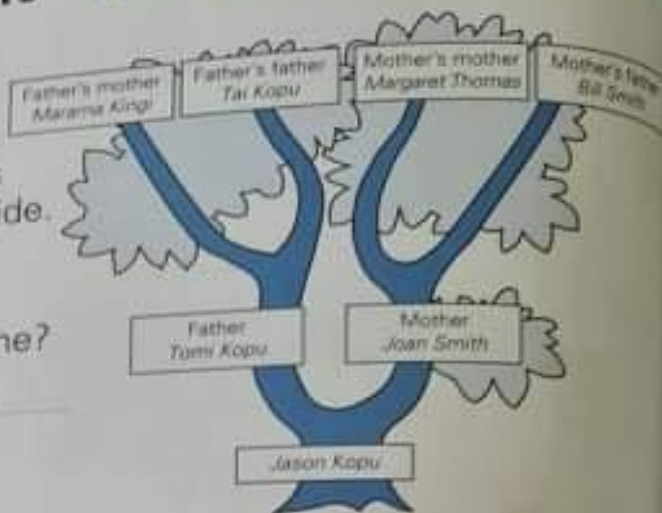


# Unit 16 FAMILIES

## UNIT 16 FAMILIES

### Reading – family tree

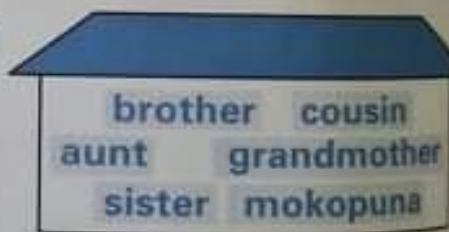
Jason's family tree shows the two branches of his family – his mother's side and his father's side. He can use the tree to find out about his grandparents.



1. What is Jason's father's name?  
\_\_\_\_\_
2. Who is Tomi's wife?  
\_\_\_\_\_
3. Write the names of Jason's two grandfathers.  
\_\_\_\_\_
4. Who is Bill Smith's wife?  
\_\_\_\_\_
5. What is the name of Margaret's child?  
\_\_\_\_\_
6. Jason's father is going to visit his parents. Jason is going with him. Who will Jason see?  
\_\_\_\_\_

### Social Studies – family relationships

Choose words from the house to describe these relatives:



1. Your uncle's child is your \_\_\_\_\_
2. Your mother's mother is your \_\_\_\_\_
3. A boy in your family is your \_\_\_\_\_
4. A girl in your family is your \_\_\_\_\_
5. Your father's sister is your \_\_\_\_\_
6. The Māori name for grandchildren is \_\_\_\_\_

# Unit 16 FAMILIES

## Spelling – word families

Make up word families using the word endings. The first family is done.

ame

name  
game  
same  
fame  
flame  
tame

et

ot

un

## Maths – family of facts

1.  $2 + 3 = 5$       $5 - 2 = 3$   
 $3 + 2 = 5$       $5 - 3 = 2$

This is called a fact family for the number 5. The numbers in this family are 2, 3 and 5.

Find the numbers to complete other families of facts for number 5.

$1 + \underline{\quad} = 5$       $5 - \underline{\quad} = 1$

2. Make some fact families for these numbers.

8

$2 + \underline{\quad} = 8$

$\underline{\quad} + \underline{\quad} = 8$

$8 - \underline{\quad} = \underline{\quad}$

$8 - \underline{\quad} = \underline{\quad}$

6

$4 + \underline{\quad} = 6$

$\underline{\quad} + \underline{\quad} = 6$

$6 - \underline{\quad} = \underline{\quad}$

$6 - \underline{\quad} = \underline{\quad}$

10

$7 + \underline{\quad} = 10$

$\underline{\quad} + \underline{\quad} = 10$

$10 - \underline{\quad} = \underline{\quad}$

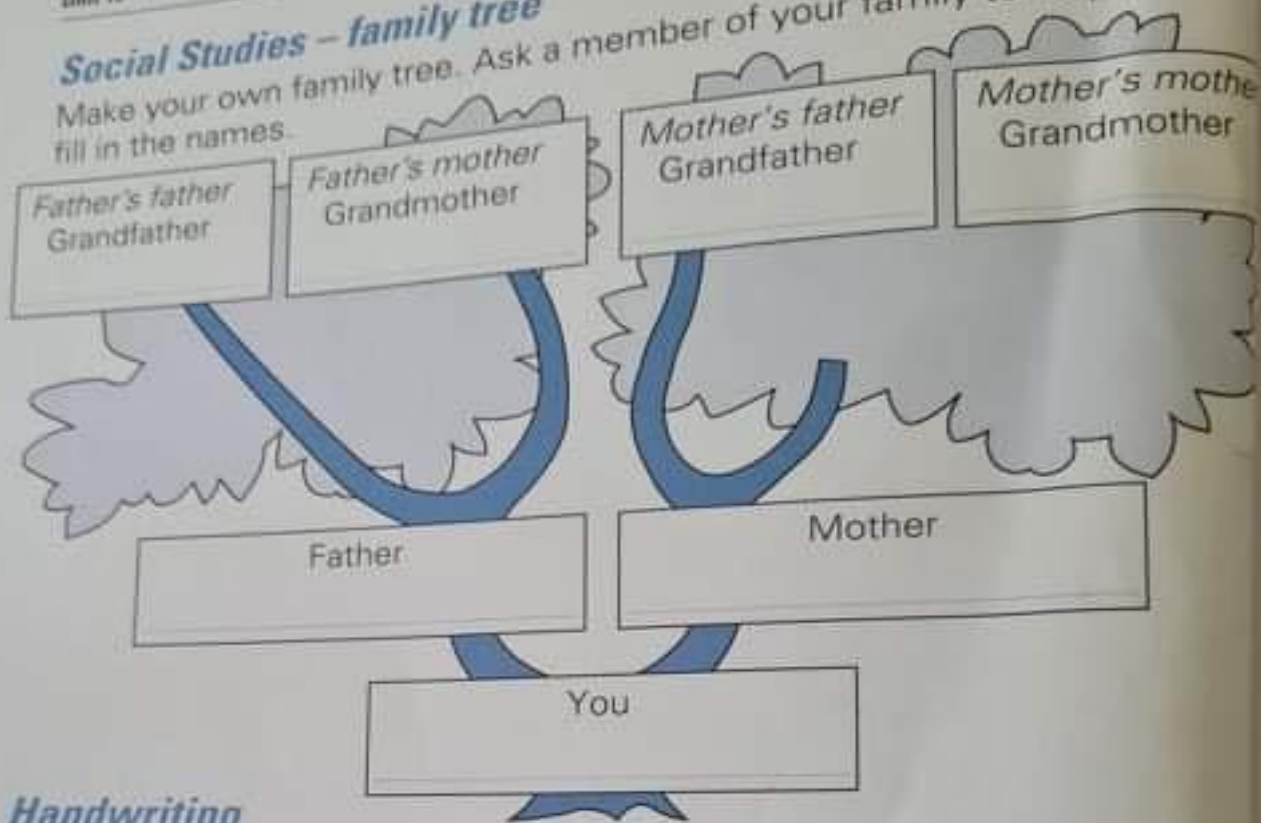
$10 - \underline{\quad} = \underline{\quad}$

# Unit 16 FAMILIES

Unit 16 Families

## Social Studies – family tree

Make your own family tree. Ask a member of your family to help you to fill in the names.



### Handwriting



Complete these lines by copying.

f f f  
f  
family

### Extra for experts

What is your opinion? Read these statements and decide if you agree or disagree. Give a reason for your answer.

1. Children should decide their own bedtime.
2. Television should be turned off at mealtimes.
3. Children should get pocket money for doing jobs at home.

